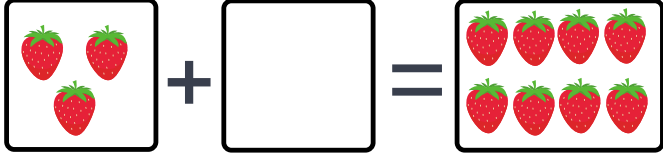
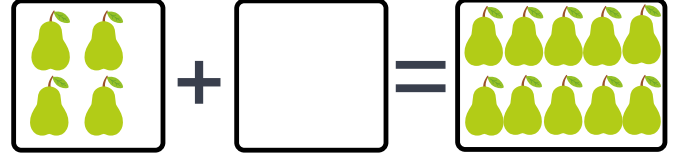


VERİLMİYEN TOPLANANI BULALIM


Modellerle gösterilen toplama işlemlerindeki verilmeyen toplananları bulalım.



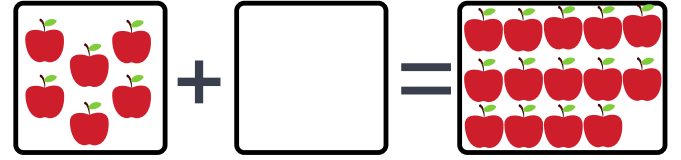
$$3 + \dots = 8$$



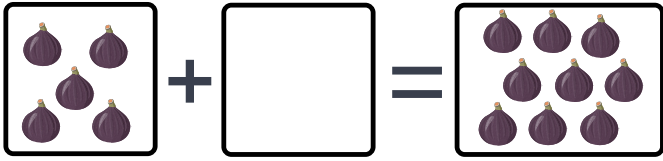
$$4 + \dots = 10$$



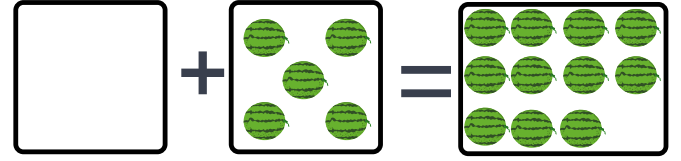
$$\dots + 9 = 12$$



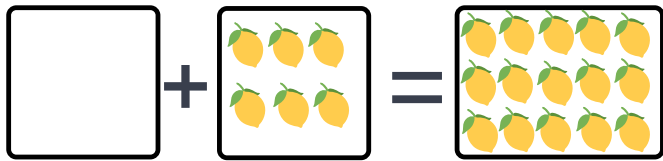
$$6 + \dots = 14$$



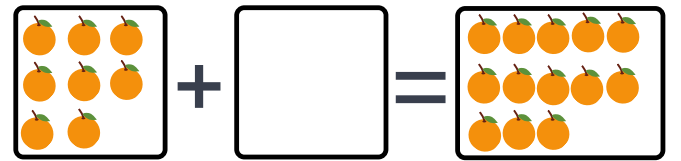
$$5 + \dots = 9$$



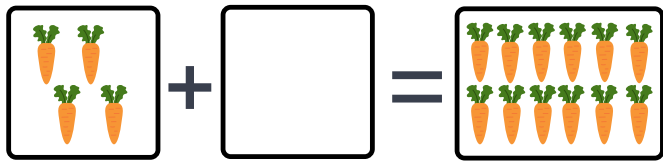
$$\dots + 6 = 11$$



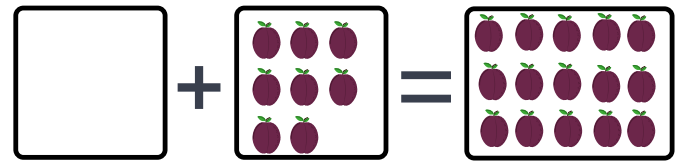
$$\dots + 6 = 15$$



$$8 + \dots = 13$$



$$4 + \dots = 12$$



$$\dots + 8 = 15$$