




# ŞEKİL-SAYI BULMACASI-1



Görsellerin karşılığı olan sayıları bularak toplama işlemlerini yapalım.




+



=

10



+



=

12




+



=


4



+



=



+



+



=

