

Verilen sayılardan sonra
gelen sayıları yazalım.



4	5	6
---	---	---

2		
---	--	--

8		
---	--	--

11		
----	--	--

3		
---	--	--

15		
----	--	--

1		
---	--	--

7		
---	--	--

6		
---	--	--

0		
---	--	--

18		
----	--	--

10		
----	--	--

9		
---	--	--

14		
----	--	--

17		
----	--	--




















12		
----	--	--

13		
----	--	--

16		
----	--	--


ÖNCE & SONRA

Verilen sayılardan önce ve sonra gelen sayıları yazalım.



ÖNCE & SONRA

Verilen sayılardan önce ve sonra gelen sayıları yazalım.



	1	
	3	
	8	
	10	
	16	
	13	
	14	

	5	
	8	
	6	
	17	
	12	
	15	
	19	