

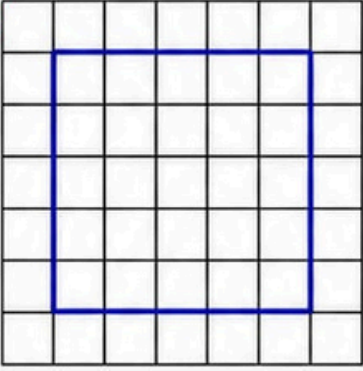


# ÇEVRE BULUYORUM!



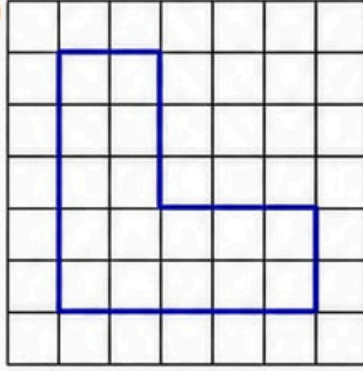
↪ Aşağıdaki şekillerin çevre uzunluklarını bulalım.

1



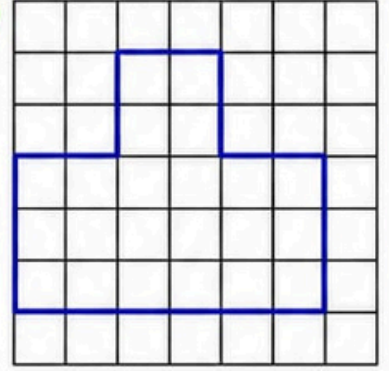
Ç = \_\_\_\_\_ kare birim

2



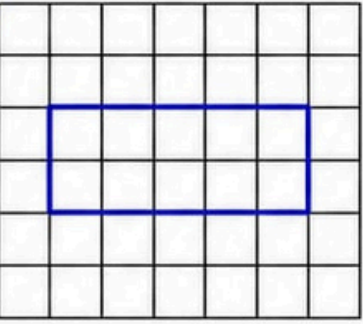
Ç = \_\_\_\_\_ kare birim

3



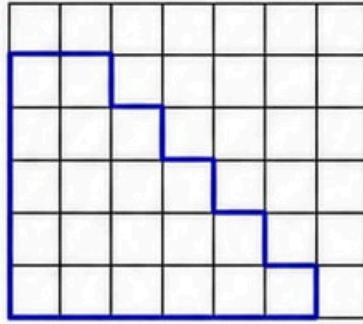
Ç = \_\_\_\_\_ kare birim

4



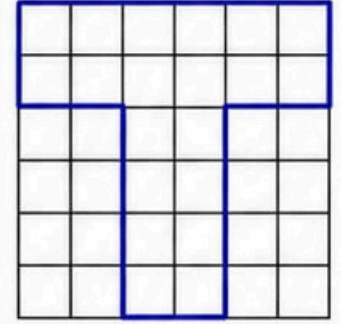
Ç = \_\_\_\_\_ kare birim

5



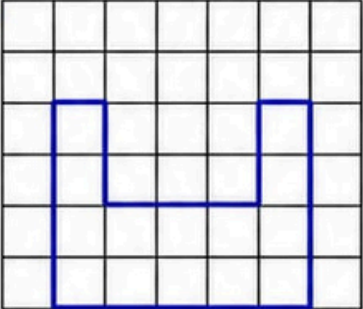
Ç = \_\_\_\_\_ kare birim

6



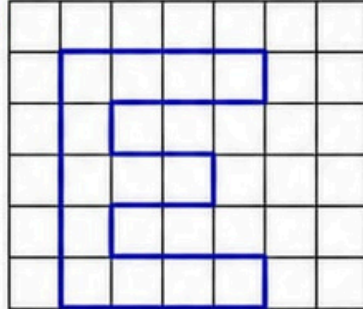
Ç = \_\_\_\_\_ kare birim

7



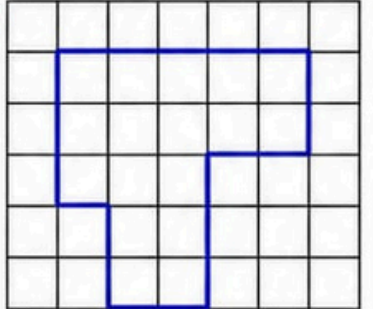
Ç = \_\_\_\_\_ kare birim

8



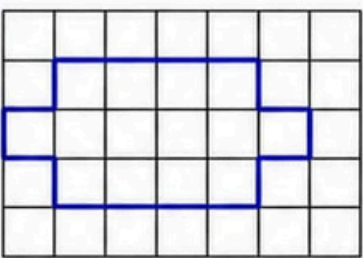
Ç = \_\_\_\_\_ kare birim

9



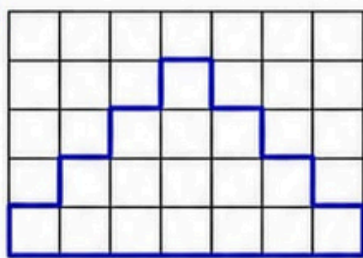
Ç = \_\_\_\_\_ kare birim

10



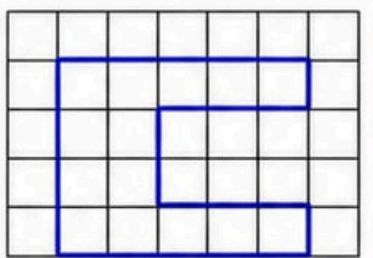
Ç = \_\_\_\_\_ kare birim

11



Ç = \_\_\_\_\_ kare birim

12



Ç = \_\_\_\_\_ kare birim



**İpucu:** Bir karenin çevresi 4 kare birimdir. Boyalı kareleri saymayı unutma!

