

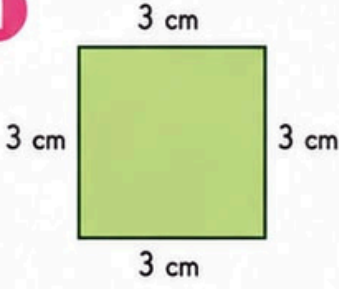


ÇEVRE BULUYORUM!



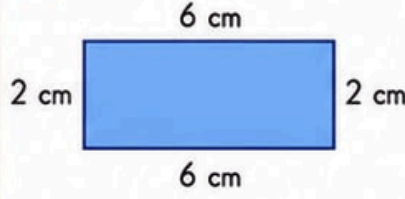
↪ Aşağıdaki şekillerin çevre uzunluklarını bulalım.

1



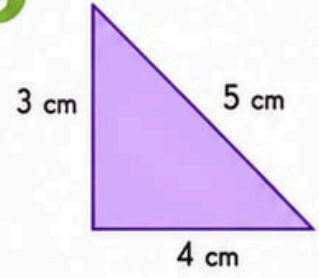
Ç = _____

2



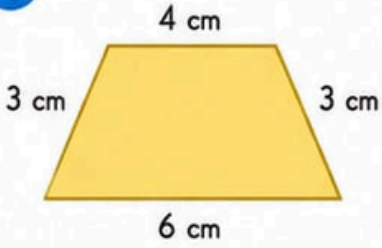
Ç = _____

3



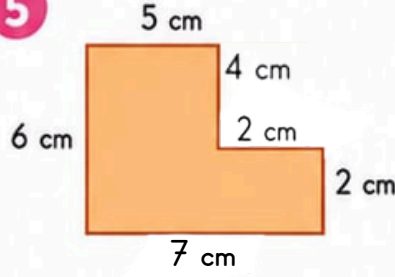
Ç = _____

4



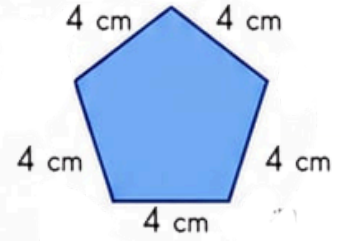
Ç = _____

5



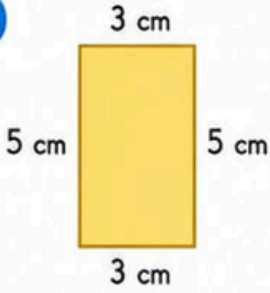
Ç = _____

6



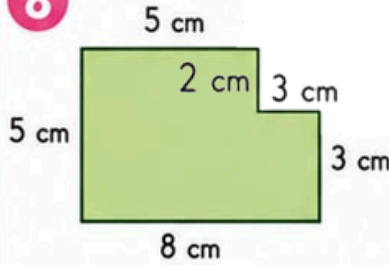
Ç = _____

7



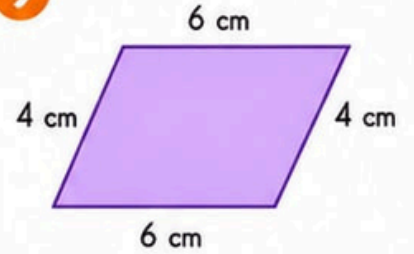
Ç = _____

8



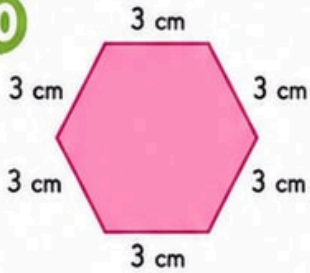
Ç = _____

9



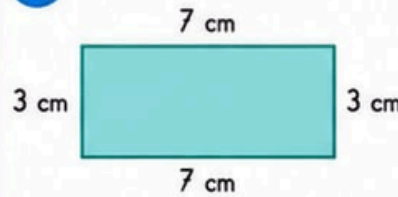
Ç = _____

10



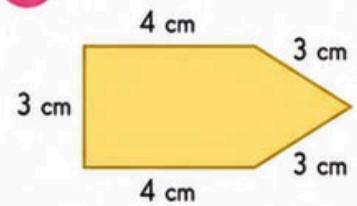
Ç = _____

11



Ç = _____

12



Ç = _____



İpucu: Çevre, şeklin etrafındaki tüm kenar uzunluklarının toplamıdır.

