




ALAN BULUYORUM!



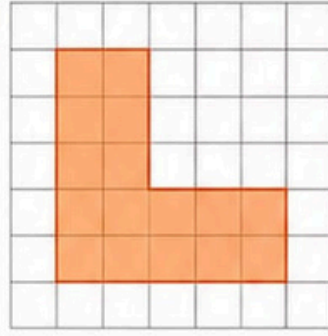
Aşağıdaki şekillerin alanlarını kare birim cinsinden bulalım.

1



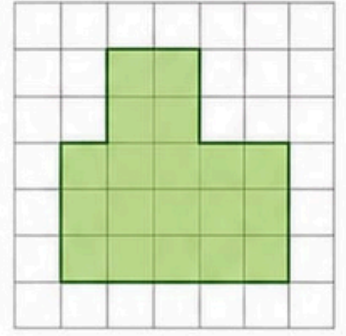
Alan = _____ kare birim

2



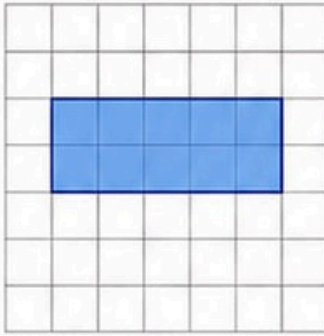
Alan = _____ kare birim

3



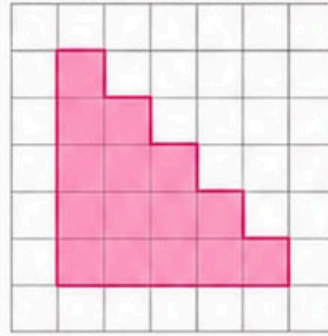
Alan = _____ kare birim

4



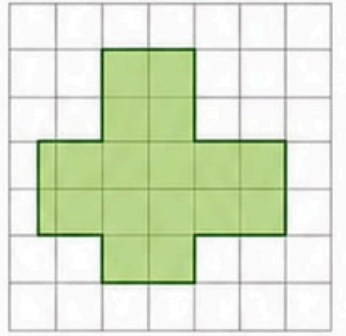
Alan = _____ kare birim

5



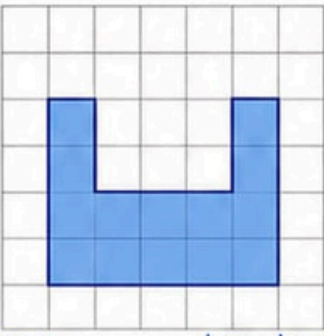
Alan = _____ kare birim

6



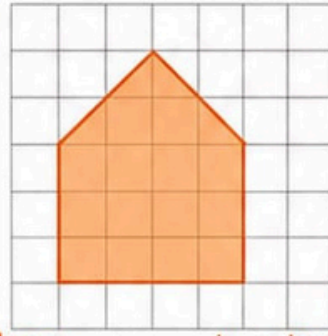
Alan = _____ kare birim

7



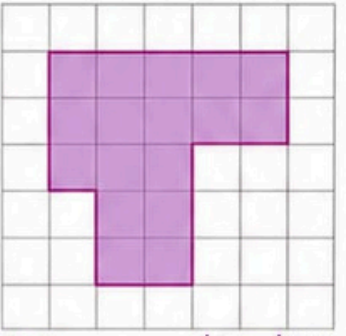
Alan = _____ kare birim

8



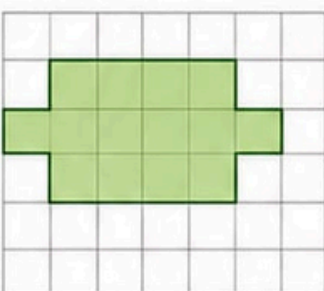
Alan = _____ kare birim

9



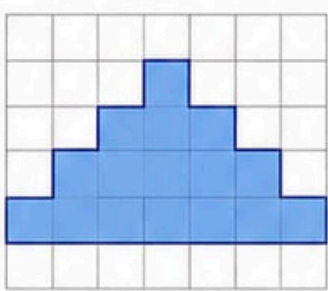
Alan = _____ kare birim

10



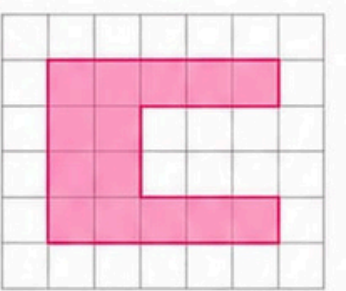
Alan = _____ kare birim

11



Alan = _____ kare birim

12



Alan = _____ kare birim



İpucu: Bir şeklin alanını bulurken boyalı kareleri saymayı unutma!

