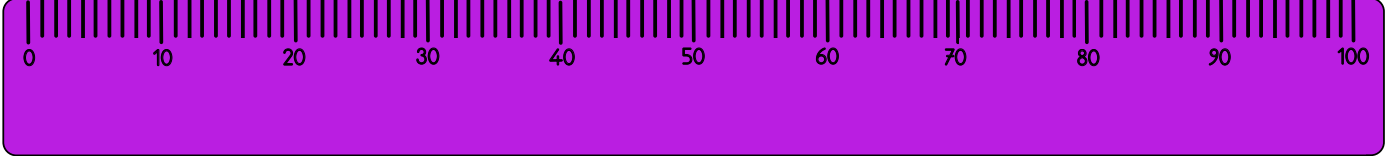


Uzunluk Ölçüleri

Uzunluk ölçmek için kullanılan ölçü birimlerine **uzunluk ölçüleri** denir. Uzunluk ölçmede kullanılan temel birim **metre**dir. Metre kısaca "**m**" ile gösterilir. Metreden daha küçük uzunluklar santimetre ile ölçülür. Santimetre kısaca "**cm**" ile gösterilir.

$$1 \text{ metre} = 100 \text{ cm}$$

$$100 \text{ cm} = 1 \text{ metre}$$



➔ Aşağıda metre olarak verilen uzunlukları santimetreye çevirelim.

$$\begin{aligned} 1 \text{ metre} &= 100 \text{ cm} \\ 7 \text{ metre} &= \dots\dots \text{ cm} \\ 4 \text{ metre} &= \dots\dots \text{ cm} \end{aligned}$$

$$\begin{aligned} 3 \text{ metre} &= \dots\dots \text{ cm} \\ 5 \text{ metre} &= \dots\dots \text{ cm} \\ 9 \text{ metre} &= \dots\dots \text{ cm} \end{aligned}$$

$$\begin{aligned} 6 \text{ metre} &= \dots\dots \text{ cm} \\ 2 \text{ metre} &= \dots\dots \text{ cm} \\ 8 \text{ metre} &= \dots\dots \text{ cm} \end{aligned}$$

➔ Aşağıda verilen uzunlukları istenilen uzunluğa dönüştürelim.

$$\begin{aligned} 2 \text{ m } 45 \text{ cm} &= 245 \text{ cm} \\ 200 + 45 &= 245 \text{ cm} \end{aligned}$$

$$\begin{aligned} 8 \text{ m } 30 \text{ cm} &= \dots\dots \text{ cm} \\ \dots\dots\dots\dots\dots\dots \end{aligned}$$

$$\begin{aligned} 4 \text{ m } 63 \text{ cm} &= \dots\dots \text{ cm} \\ \dots\dots\dots\dots\dots\dots \end{aligned}$$

$$\begin{aligned} 4 \text{ m } 83 \text{ cm} &= \dots\dots \text{ cm} \\ 9 \text{ m } 10 \text{ cm} &= \dots\dots \text{ cm} \\ 5 \text{ m } 62 \text{ cm} &= \dots\dots \text{ cm} \end{aligned}$$

$$\begin{aligned} 6 \text{ m } 90 \text{ cm} &= \dots\dots \text{ cm} \\ 8 \text{ m } 35 \text{ cm} &= \dots\dots \text{ cm} \\ 3 \text{ m } 50 \text{ cm} &= \dots\dots \text{ cm} \end{aligned}$$

$$\begin{aligned} 1 \text{ m } 18 \text{ cm} &= \dots\dots \text{ cm} \\ 7 \text{ m } 62 \text{ cm} &= \dots\dots \text{ cm} \\ 4 \text{ m } 70 \text{ cm} &= \dots\dots \text{ cm} \end{aligned}$$

➔ Aşağıda santimetre olarak verilen uzunlukları metreye çevirelim.

$$\begin{aligned} 100 \text{ cm} &= 1 \text{ m} \\ 500 \text{ cm} &= \dots\dots \text{ m} \\ 300 \text{ cm} &= \dots\dots \text{ m} \end{aligned}$$

$$\begin{aligned} 400 \text{ cm} &= \dots\dots \text{ m} \\ 900 \text{ cm} &= \dots\dots \text{ m} \\ 700 \text{ cm} &= \dots\dots \text{ m} \end{aligned}$$

$$\begin{aligned} 200 \text{ cm} &= \dots\dots \text{ m} \\ 600 \text{ cm} &= \dots\dots \text{ m} \\ 1000 \text{ cm} &= \dots\dots \text{ m} \end{aligned}$$

➔ Aşağıda verilen uzunlukları istenilen uzunluğa dönüştürelim.

$$\begin{aligned} 125 \text{ cm} \\ 1 \text{ m } 25 \text{ cm} \end{aligned}$$

$$\begin{aligned} 365 \text{ cm} \\ \dots \text{ m } \dots \text{ cm} \end{aligned}$$

$$\begin{aligned} 674 \text{ cm} \\ \dots \text{ m } \dots \text{ cm} \end{aligned}$$

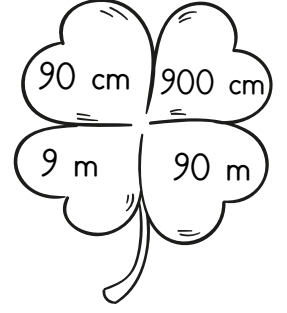
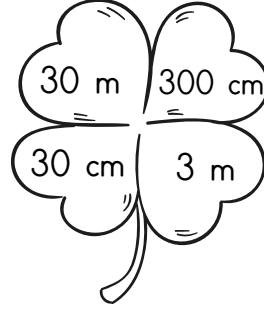
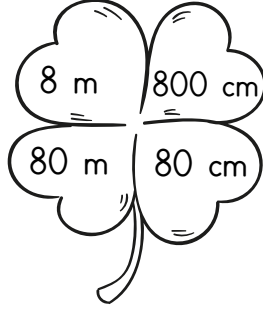
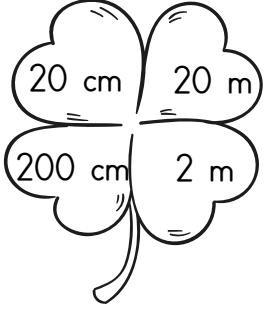
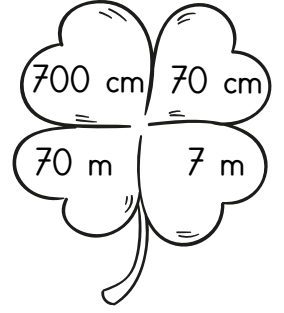
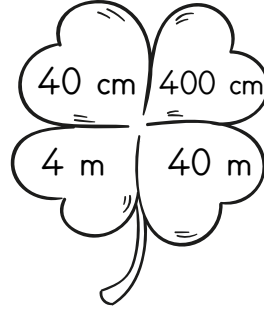
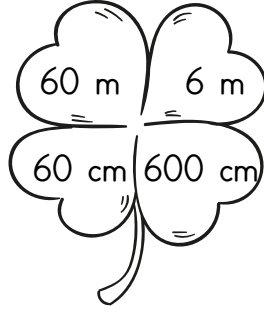
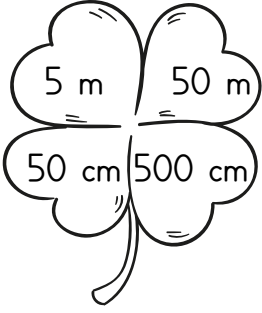
$$\begin{aligned} 410 \text{ cm} &= \dots \text{ m } \dots \text{ cm} \\ 589 \text{ cm} &= \dots \text{ m } \dots \text{ cm} \\ 765 \text{ cm} &= \dots \text{ m } \dots \text{ cm} \end{aligned}$$

$$\begin{aligned} 615 \text{ cm} &= \dots \text{ m } \dots \text{ cm} \\ 269 \text{ cm} &= \dots \text{ m } \dots \text{ cm} \\ 502 \text{ cm} &= \dots \text{ m } \dots \text{ cm} \end{aligned}$$

$$\begin{aligned} 271 \text{ cm} &= \dots \text{ m } \dots \text{ cm} \\ 804 \text{ cm} &= \dots \text{ m } \dots \text{ cm} \\ 600 \text{ cm} &= \dots \text{ m } \dots \text{ cm} \end{aligned}$$

Uzunluk Ölçme

➔ Yoncalarda yazılı olan uzunluklardan eşit olanları aynı renge boyayalım



➔ Aşağıda metre olarak verilen uzunlukları santimetreye çevirelim.

esra_ogretmenimm

5 m 45 cm = cm
4 m 69 cm = cm
9 m 28 cm = cm
2 m 13 cm = cm
6 m 70 cm = cm
3 m 82 cm = cm

673 cm = m cm
520 cm = m cm
148 cm = m cm
703 cm = m cm
925 cm = m cm
300 cm = m cm

➔ Aşağıda verilen uzunlukları eşleştirelim.


6 m 45 cm ○
578 cm ○
240 cm ○
7 m 90 cm ○
3 m ○

○ 790 cm
○ 2 m 40 cm
○ 300 cm
○ 5 m 78 cm
○ 645 cm

230 cm ○
8 m 27 cm ○
9 m ○
4 m 50 cm ○
768 cm ○

○ 900 cm
○ 7 m 68 cm
○ 450 cm
○ 2 m 30 cm
○ 827 cm

➔ Aşağıda verilen uzunlukları doğru olarak eşleştirelim.



Ela ile Ali'nin boy uzunlukları kaç santimetredir?

Ela: 1... m 28 cm = cm + cm = cm

Ali: m cm = cm + cm = cm