




Verilen kesirleri örnekteki gibi gösterelim.



$$\frac{1}{3}$$




$$\frac{5}{6}$$




$$\frac{1}{2}$$



$$\frac{3}{6}$$



$$\frac{4}{5}$$



$$\frac{5}{8}$$




$$\frac{7}{10}$$



$$\frac{5}{9}$$




$$\frac{6}{7}$$




$$\frac{1}{4}$$



$$\frac{2}{5}$$




$$1$$



$$\frac{6}{8}$$



$$\frac{4}{7}$$



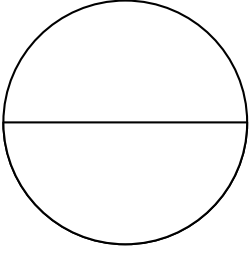
$$\frac{2}{4}$$



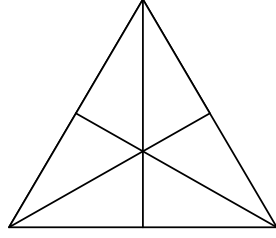
KESİRLER




Verilen kesirleri şekillerde gösterelim.



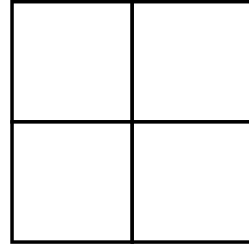
$$\frac{1}{2}$$



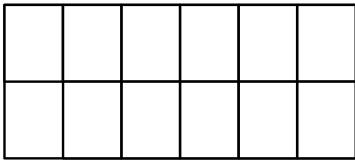
$$\frac{2}{6}$$



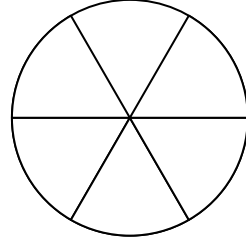
$$\frac{4}{5}$$



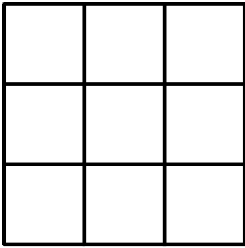
$$\frac{3}{4}$$



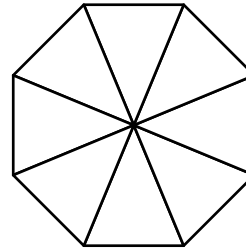
$$\frac{7}{12}$$



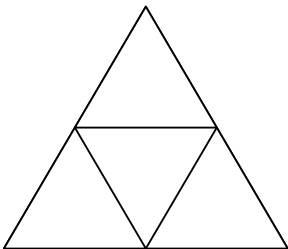
$$\frac{5}{6}$$



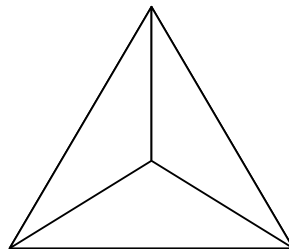
$$\frac{6}{9}$$




$$\frac{3}{8}$$



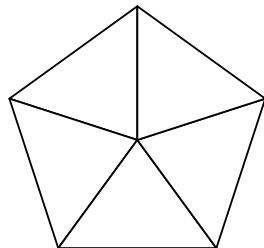
$$\frac{2}{4}$$



$$\frac{1}{3}$$



$$\frac{4}{7}$$



$$1$$